



ARMY PUBLIC SCHOOL – DHRANGADHRA

Academic Session: 2020-21

Worksheet for Class II

Subject: MATHS

WORKSHEET 1

Q1. Write the following numbers in figures.

1. Two hundred seventy six
2. Three hundred
3. Three hundred twenty three
4. One hundred thirty nine
5. Two hundred four

Q2. Write the number name:

1. 356
2. 121
3. 310
4. 222
5. 245

Q3. Complete the chain by filling in the missing numbers:

1. 122, 123, _____, _____, 126, _____, 128
2. 268, _____, _____, 271, _____, 273, _____

3. 148, _____, 150, _____, _____ 153, _____

4. _____, 390, _____, _____, 393, _____, _____

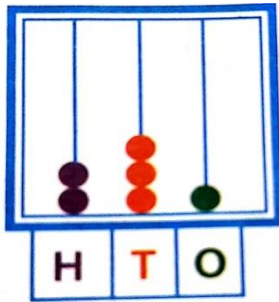
5. 136, _____, 138, _____, 140, _____, _____ 143

Q4. Write and practice the numbers 1 to 500

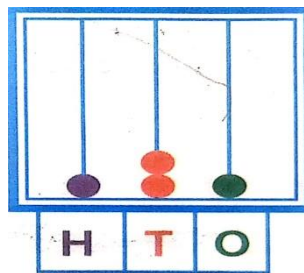
WORKSHEET -2

Q1. Read the numbers shown on the abacus and fill in the blanks:

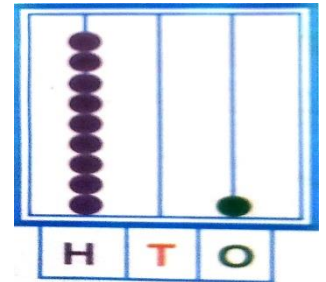
1.



2.



3.



Q2. What number comes before, after, between:

1. _____ 493

2. _____ 125

3. 600 _____

4. 376 _____

5. 738, _____, _____, 741

6. 905, _____, _____, 908

Q3. Write in expanded form:

$$1. 517 = \square + \square + \square$$

$$2. 785 = \square + \square + \square$$

$$3. 275 = \square + \square + \square$$

$$4. 905 = \square + \square + \square$$

Q4. Write in short form:

$$1. 900+30+8 = \underline{\hspace{2cm}}$$

$$2. 800+20+0 = \underline{\hspace{2cm}}$$

$$3. 300+30+9 = \underline{\hspace{2cm}}$$

$$4. 200+40+5 = \underline{\hspace{2cm}}$$

Q5. Write the place value of the coloured digit:

$$1. 89 \quad \text{[wavy box]}$$

$$2. 136 \quad \text{[wavy box]}$$

$$3. 63 \quad \text{[wavy box]}$$

$$4. 895 \quad \text{[wavy box]}$$

WORKSHEET – 3

Q1. Write in ascending (increasing) order:

1. 729, 693, 742, 666

2. 329, 422, 280, 308

3. 228, 374, 125, 196

4. 513, 325, 611, 712

Q2. Write in descending (decreasing) order:

1. 146, 193, 225, 208

2. 987, 345, 654, 808

3. 777, 707, 770, 526

Q3. Encircle the smallest number:

1. 327, 413, 205, 526

2. 404, 127, 229, 317

3. 720, 573, 527, 411

Q4. Encircle the greatest number:

1. 327, 409, 613, 225

2. 179, 375, 128, 217

3. 203, 514, 629, 178

Q5. Use > or < to make correct sentences:

1.598 **510**

2. 800 **799**

3. 429 **415**

4. 276 **196**

5.507 **473**

Q6. Write and practice the numbers 501 to 1000